

MATH 116 — PRACTICE FOR EXAM 3

Generated November 18, 2018

NAME: _____

INSTRUCTOR: _____ SECTION NUMBER: _____

1. This exam has 5 questions. Note that the problems are not of equal difficulty, so you may want to skip over and return to a problem on which you are stuck.
2. Do not separate the pages of the exam. If any pages do become separated, write your name on them and point them out to your instructor when you hand in the exam.
3. Please read the instructions for each individual exercise carefully. One of the skills being tested on this exam is your ability to interpret questions, so instructors will not answer questions about exam problems during the exam.
4. Show an appropriate amount of work (including appropriate explanation) for each exercise so that the graders can see not only the answer but also how you obtained it. Include units in your answers where appropriate.
5. You may use any calculator except a TI-92 (or other calculator with a full alphanumeric keypad). However, you must show work for any calculation which we have learned how to do in this course. You are also allowed two sides of a $3'' \times 5''$ note card.
6. If you use graphs or tables to obtain an answer, be certain to include an explanation and sketch of the graph, and to write out the entries of the table that you use.
7. You must use the methods learned in this course to solve all problems.

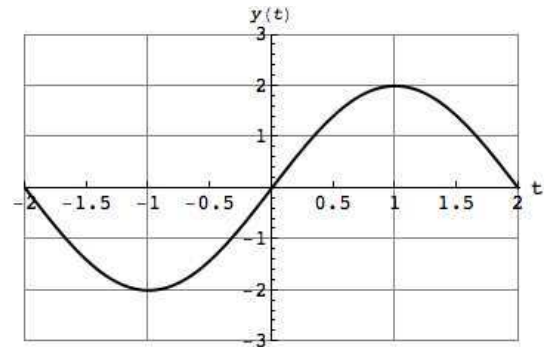
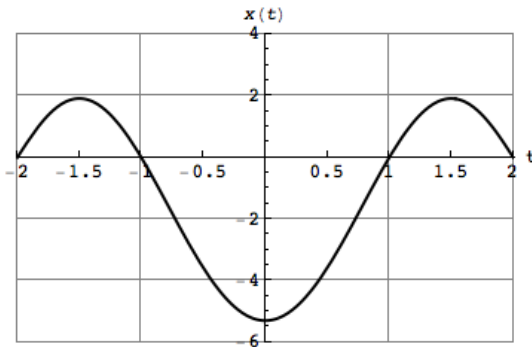
Semester	Exam	Problem	Name	Points	Score
Winter 2013	2	5	heart	12	
Fall 2013	2	3	birds	14	
Fall 2014	1	6	soup	11	
Winter 2016	2	3	O ghan	13	
Fall 2016	2	10	tracking chip	14	
Total				64	

Recommended time (based on points): 58 minutes

5. [12 points] A particle moves according to the following parametric equations

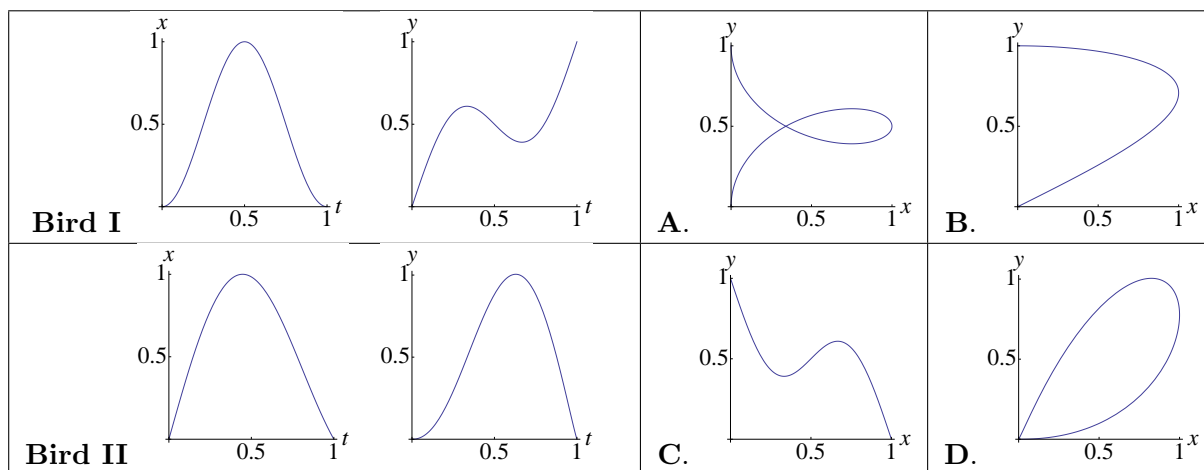
$$x = x(t) \quad \text{and} \quad y = y(t) \quad \text{for} \quad -2 \leq t \leq 2,$$

where the graphs of $x(t)$ and $y(t)$ are shown below.



- a. [2 points] Is there a value of t at which the particle is at the point $(0, 2)$? If so, find the value of t where this happens.
- b. [3 points] At which value(s) of t does the particle on the x -axis?
- c. [4 points] At what points (x, y) does the curve traveled by the particle have a horizontal tangent line? Include the time of each point.
- d. [3 points] For which of values of t is the slope of the tangent line to the curve positive?

3. [14 points] The x and y positions of two birds in flight, Bird I and Bird II, are graphed below as functions of time t (see figures labeled Bird I and Bird II on the left). To the right, there are four parametric curves, A,B,C,D, showing flight paths of several birds in the x - y plane.



- a. [2 points] Is the horizontal velocity of bird I zero at any time $0 < t < 1$? If so, give an approximate t value.
- b. [2 points] Based on the plots shown for bird II, consider a parametric curve for the flight path for bird II in the x - y plane. Would the slope of the tangent line to the flight path curve at time $t = 0.9$ be positive, negative, or zero? Justify.
- c. [4 points] One of the parametric curves A,B,C,D corresponds to bird I and another corresponds to bird II. Indicate which ones by circling the correct answers:

Bird I corresponds to:	A	B	C	D
Bird II corresponds to:	A	B	C	D

d. [6 points] A third bird flies according to the following parametric equations

$$x(t) = 1 - t^3 \quad y(t) = t^2 - t.$$

1. Find the time(s) at which the bird is flying straight horizontally right or left. Show all your work.
2. Find the speed of the bird at $t = 1$. Show all your work.

6. [11 points] Franklin, your robot, is zipping around the kitchen making his famous “Definitely Not Poison!” soup. His coordinates in the xy -plane are given by the parametric equations

$$x = t^2 - t \quad y = -\sin(\pi t)$$

t seconds after he starts making soup. Assume that both x and y are measured in meters.

- a. [2 points] Calculate $\frac{dx}{dt}$ and $\frac{dy}{dt}$.

$$\frac{dx}{dt} = \underline{\hspace{2cm}} \quad \frac{dy}{dt} = \underline{\hspace{2cm}}$$

- b. [2 points] Find all times t when Franklin’s velocity is zero.

$$t = \underline{\hspace{2cm}}$$

- c. [3 points] Find Franklin’s **speed** when $t = 2$ seconds. Include units.

$$\text{Franklin's speed} = \underline{\hspace{2cm}}$$

- d. [4 points] Write an integral which gives the distance traveled by Franklin during his first five seconds of zipping around. Do not evaluate this integral.

3. [13 points] O-guk's playful son, O-ghan, is running on the xy -plane. His position t seconds after he begins running is

$$x = \sqrt{t} - 1 \qquad y = \sin(t) + 1.$$

Assume x and y are in meters.

- a. [3 points] Does O-ghan pass through the origin? Briefly justify.

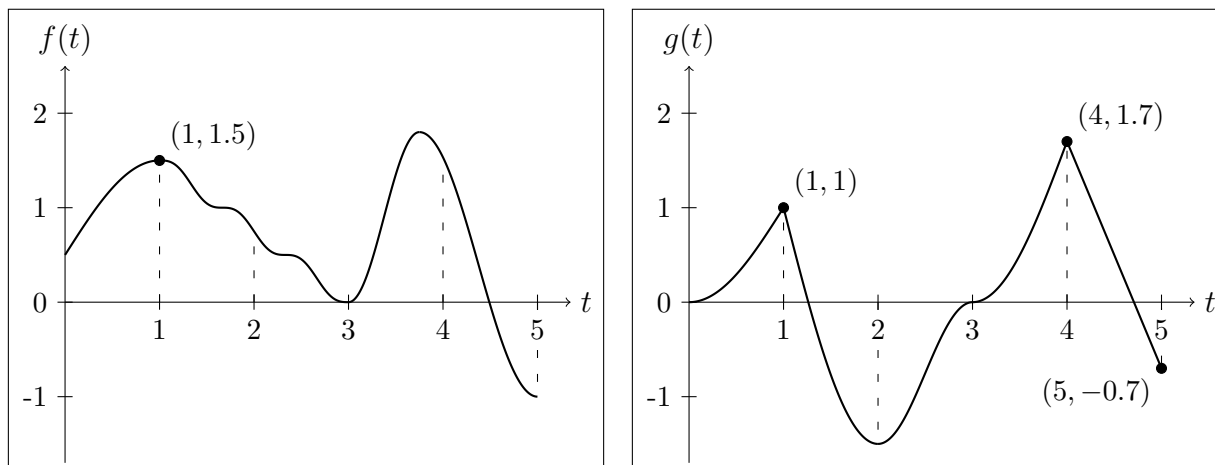
- b. [4 points] How fast is O-ghan running at $t = 5$? Give your answer in **exact** form (i.e. no decimal approximations). Include **units**.

- c. [6 points] Find an equation, in xy -coordinates, of the tangent line to his path at $t = 1$.

10. [14 points] Fearing that she is losing authority over her robot ward, Dr. Durant has installed a tracking chip in Steph's mainframe. The chip gives Steph's location separately in x - and y -coordinates, where the units of the axes are miles, Dr. Durant's office corresponds to the origin $(x, y) = (0, 0)$, the positive y -axis points north, and the positive x -axis points east. On night 1, Dr. Durant noticed unusual levels of activity; t hours after midnight, Steph began moving according to the parametric equations

$$x = f(t) \qquad y = g(t),$$

where $f(t)$ and $g(t)$ are plotted below for $0 \leq t \leq 5$.



- a. [2 points] When was Steph farthest north and south on night 1? Write your answers in the blanks provided. You do **not** need to show your work.

North: _____ a.m.

South: _____ a.m.

- b. [3 points] What was Steph's speed at $t = 4.9$ on night 1? You may use the fact that $f'(4.9) = -1$. Include units.

- c. [2 points] What direction was Steph moving at $t = 2$ on night 1? Circle only one answer.

NORTH AND EAST

EAST ONLY

SOUTH AND EAST

NORTH AND WEST

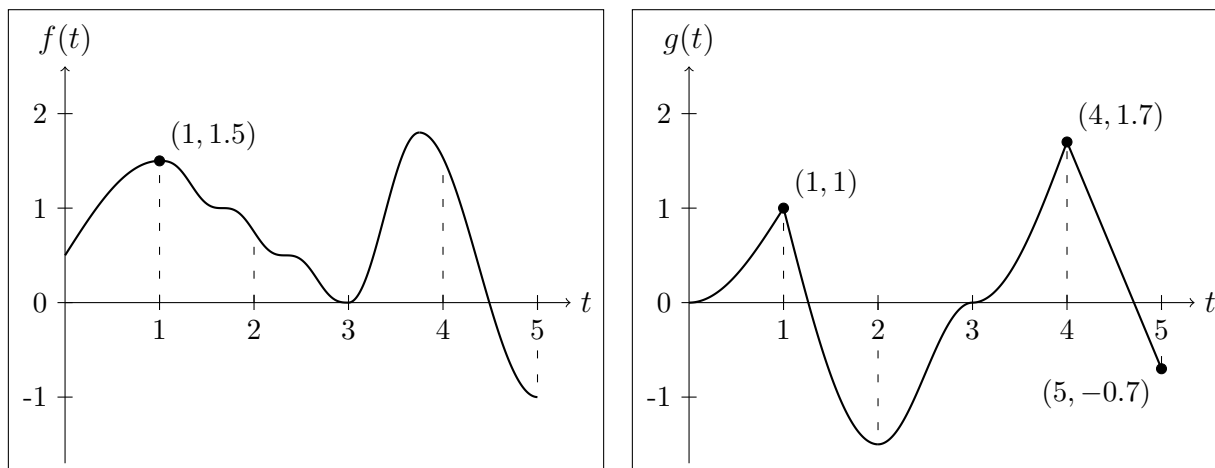
WEST ONLY

SOUTH AND WEST

10 (continued). Recall that on night 1, Steph's position was given by the parametric equations

$$x = f(t) \qquad y = g(t),$$

where $f(t)$ and $g(t)$ are plotted below for $0 \leq t \leq 5$. As before, Dr. Durant's office is at the origin $(x, y) = (0, 0)$, the positive y -axis points north, and the positive x -axis points east.



d. [3 points] How far away was Steph from Dr. Durant's office at $t = 1$ on night 1?

On night 2, Steph's movements were even stranger, following the parametric equations

$$x = \int_0^t f(s) ds \qquad y = \int_0^t g(s) ds.$$

e. [2 points] What direction was Steph moving at $t = 2$ on night 2? Circle only one answer.

NORTH AND EAST

EAST ONLY

SOUTH AND EAST

NORTH AND WEST

WEST ONLY

SOUTH AND WEST

f. [2 points] Did Steph come to a stop between midnight and 5 a.m. on night 2? If so, at what time(s) did she come to a stop?